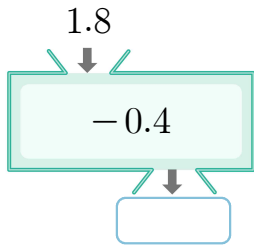


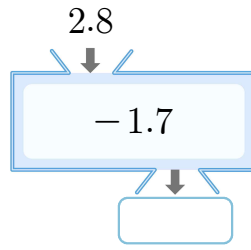


[17~22] □ 안에 알맞은 수를 써넣으세요.

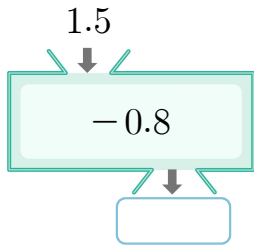
17



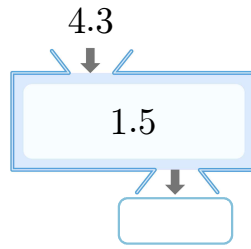
18



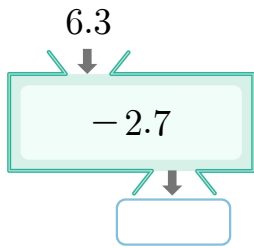
19



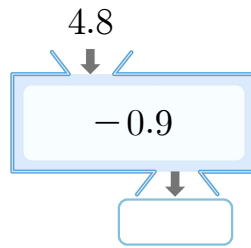
20



21



22



23 계산 결과가 다른 하나를 찾아 ○표 하세요.

$6.4 - 2.8$

(      )

$8.7 - 4.2$

(      )

$8.1 - 3.6$

(      )

[24~25] 차의 크기를 비교하여 ○ 안에 >, =, < 를 알맞게 써넣으세요.

24

$5.6 - 2.4$

○

$7.6 - 4.5$

25

$2.4 - 0.5$

○

$4.8 - 1.9$

[01 ~ 12] 계산해 보세요.

01  $0.9 - 0.4 = 0.5$

02  $0.3 - 0.1 = 0.2$

03  $0.8 - 0.7 = 0.1$

04  $4.6 - 2.5 = 2.1$

05  $3.1 - 0.8 = 2.3$

06  $5.3 - 1.9 = 3.4$

07 
$$\begin{array}{r} 0.8 \\ - 0.5 \\ \hline 0.3 \end{array}$$

08 
$$\begin{array}{r} 0.7 \\ - 0.2 \\ \hline 0.5 \end{array}$$

09 
$$\begin{array}{r} 1.9 \\ - 0.5 \\ \hline 1.4 \end{array}$$

10 
$$\begin{array}{r} 1.1 \\ - 0.6 \\ \hline 0.5 \end{array}$$

11 
$$\begin{array}{r} 3.4 \\ - 1.2 \\ \hline 2.2 \end{array}$$

12 
$$\begin{array}{r} 5.3 \\ - 2.7 \\ \hline 2.6 \end{array}$$

[13 ~ 17] 큰 수에서 작은 수를 뺀 값을 구해 보세요.

13 1.5 0.2

( 1.3 )

14 1.3 4.7

( 3.4 )

15 9.4 5.6

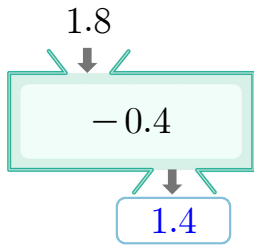
( 3.8 )

16 4.8 8.5

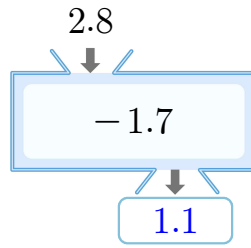
( 3.7 )

[17~22] □ 안에 알맞은 수를 써넣으세요.

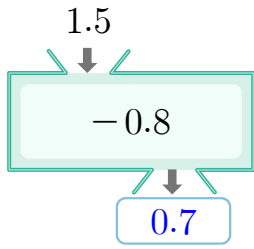
17



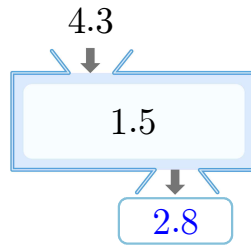
18



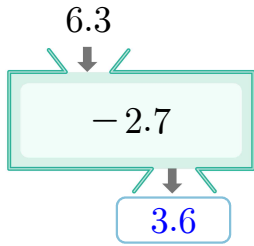
19



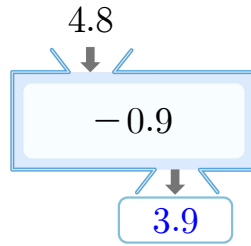
20



21



22



23 계산 결과가 다른 하나를 찾아 ○표 하세요.

$$6.4 - 2.8$$

$$(\quad \bigcirc \quad) \\ = 3.6$$

$$8.7 - 4.2$$

$$(\quad \quad) \\ = 4.5$$

$$8.1 - 3.6$$

$$(\quad \quad) \\ = 4.5$$

[24~25] 차의 크기를 비교하여 ○ 안에 >, =, < 를 알맞게 써넣으세요.

24

$$5.6 - 2.4$$

>

$$7.6 - 4.5$$

$$= 3.2$$

$$= 3.1$$

25

$$2.4 - 0.5$$

<

$$4.8 - 1.9$$

$$= 1.9$$

$$= 2.9$$